

Year 2 Maths Activity Mat 4

Section 1

Along a road, there are 20 street lamps. 11 of them are not working. How many lamps are working?

Section 2

Put these numbers in order, smallest to largest:

82	28	18	48	89
<input type="text"/>	<input type="text"/>	<input type="text"/>	<input type="text"/>	<input type="text"/>

smallest largest


Section 3

This table shows the number of girls and boys who have red or black cars in one class. Find the totals.

Car colour	Girls	Boys	Total
Red	12	3	
Black	9	8	

Section 4

Draw the hands on the clock to show this time: 3 o'clock



Section 6

I have a pound coin.
I buy a lolly for 25p.
How much change will I be given?
Which coins could I be given in change?

Section 7

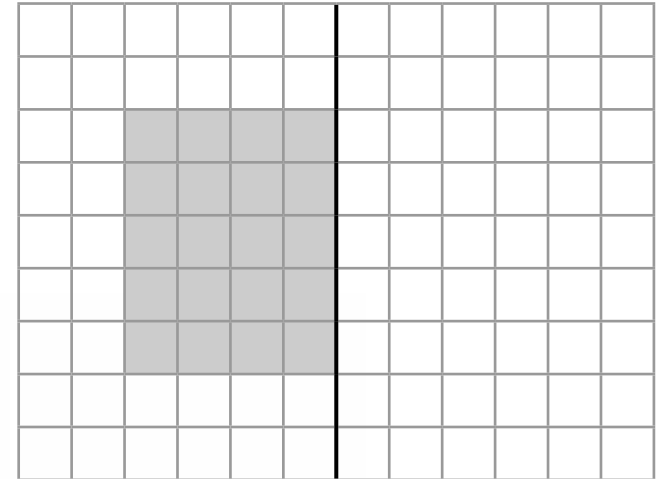
Write a number sentence which has the same answer as:

$24 - 4 =$

$12 + 7 =$

Section 8

Draw the reflection of the shape.



Section 5

What 2D shape is at both ends of a cylinder?

Year 2 Maths Activity Mat 4 Answers

Section 1

Along a road, there are 20 street lamps. 11 of them are not working. How many lamps are working?

9

Section 2

Put these numbers in order, smallest to largest:

82	28	18	48	89
18	28	48	82	89

smallest largest


Section 3

This table shows the number of girls and boys who have red or black cars in one class. Find the totals.

Car colour	Girls	Boys	Total
Red	12	3	15
Black	9	8	17

Section 4

Draw the hands on the clock to show this time: 3 o'clock



Section 6

I have a pound coin.

I buy a lolly for 25p.

How much change will I be given?

Which coins could I be given in change?

75p. Accept any coins making a total of 75p

Section 7

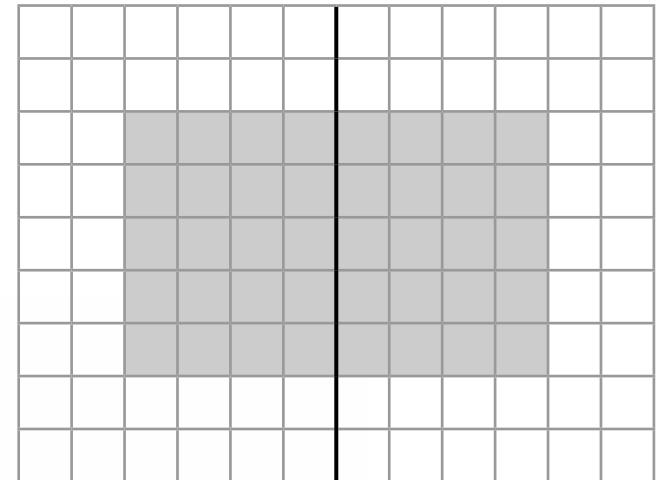
Write a number sentence which has the same answer as:

$$24 - 4 = \text{E.g. } 10 + 10 = 20$$

$$12 + 7 = \text{E.g. } 15 + 4 = 19$$

Section 8

Draw the reflection of the shape.



Section 5

What 2D shape is at both ends of a cylinder?

circle

Year 2 Maths Activity Mat 4

Section 1

Along a road, there are 28 street lamps. $\frac{1}{2}$ are not working. How many are not working?

Section 2

Put these numbers in order, smallest to largest:

33 13 23 34 53 73

<input type="text"/>	<input type="text"/>	<input type="text"/>	<input type="text"/>	<input type="text"/>	<input type="text"/>
----------------------	----------------------	----------------------	----------------------	----------------------	----------------------

smallest

largest


Section 3

This table shows the number of girls and boys who have red, black or white cars, in Class 2A. Show the numbers as a tally.

Car colour	Girls	Tally	Boys	Tally
Red	4		10	
Black	8		6	
White	7		3	

Section 4

Draw the hands on the clock to show this time: Quarter to 4

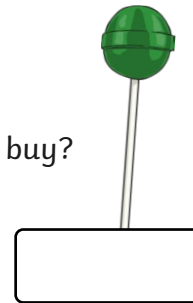


Section 6

Lollies cost 20p each.

I have £1.60

How many lollies could I buy?



Section 7

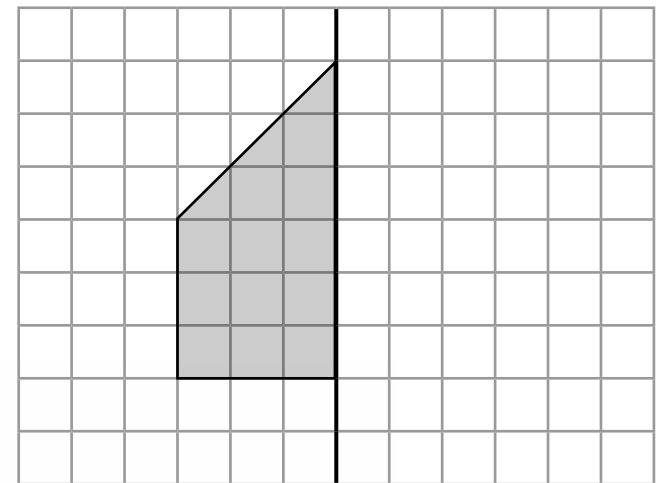
Fill in the missing numbers:

$$7 \times 2 = 10 + \boxed{}$$

$$45 \div 5 = 20 - \boxed{}$$

Section 8

Draw the reflection of the shape.



Section 5

What 2D shape is at both ends of a cuboid?

Year 2 Maths Activity Mat 4 Answers

Section 1

Along a road, there are 28 street lamps. $\frac{1}{2}$ are not working. How many are not working?

14

Section 2

Put these numbers in order, smallest to largest:

33	13	23	34	53	73
13	23	33	34	53	73

smallest largest


Section 3

This table shows the number of girls and boys who have red, black or white cars, in Class 2A. Show the numbers as a tally.

Car colour	Girls	Tally	Boys	Tally
Red	4		10	
Black	8		6	
White	7		3	

Section 4

Draw the hands on the clock to show this time: Quarter to 4



Section 6

Lollies cost 20p each.

I have £1.60

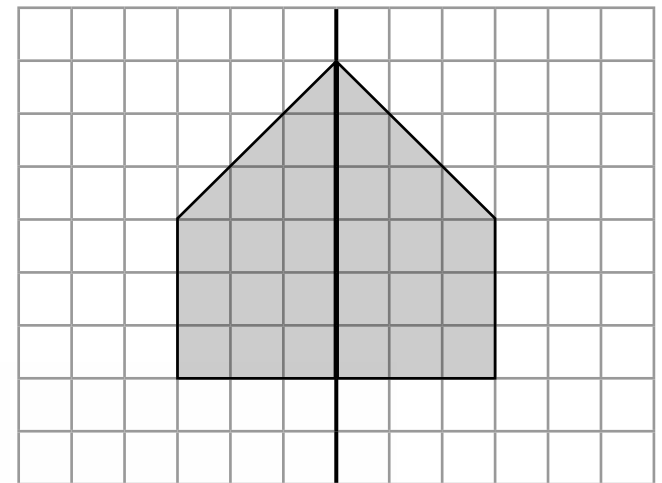
How many lollies could I buy?



8

Section 8

Draw the reflection of the shape.



Section 5

What 2D shape is at both ends of a cuboid?

rectangle or square

Section 7

Fill in the missing numbers:

$$7 \times 2 = 10 +$$

4

$$45 \div 5 = 20 -$$

11

Year 2 Maths Activity Mat 4

Section 1

Along a road, there are 32 street lamps. One quarter of them are not working. How many lamps are working?

Section 2

Put these numbers in order, smallest to largest:

201 312 223 103 112

--	--	--	--	--

smallest

largest

Section 3

This table shows how many girls and boys have which coloured cars. Show this information in a pictogram on a separate piece of paper.

Car colour	Girls	Boys
Red	10	6
Black	8	7
White	3	5
Other	2	4

Section 4

Harry has a football match at 2.30pm. It will take 30 minutes to get there. It is now 2.15pm. Can he get to the match on time? Explain your answer.

.....

.....

Section 6

I have £2.30.

A Fizzbomb costs 25p.

How many can I buy? Will I have any change?



Section 5

Draw a triangular prism. What 2D shape is at both of the ends?

Section 7

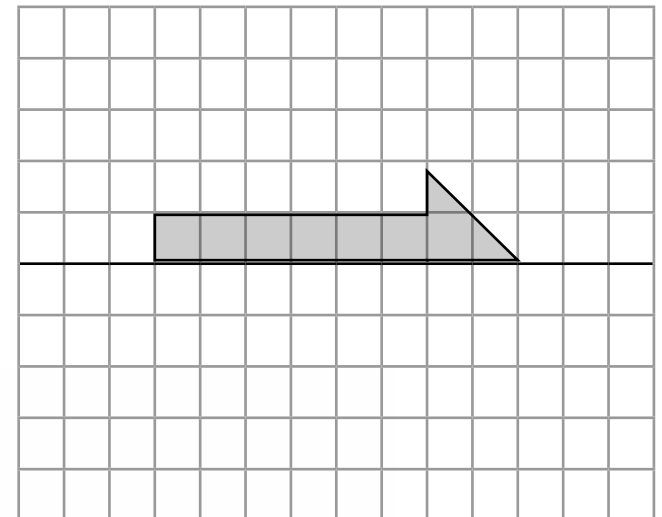
Fill in the missing numbers:

$$8 \div 4 = 18 - \boxed{}$$

$$5 \times 8 = 35 + \boxed{}$$

Section 8

Draw the reflection of the shape.



Year 2 Maths Activity Mat 4 Answers

Section 1

Along a road, there are 32 street lamps. One quarter of them are not working. How many lamps are working?

8

Section 2

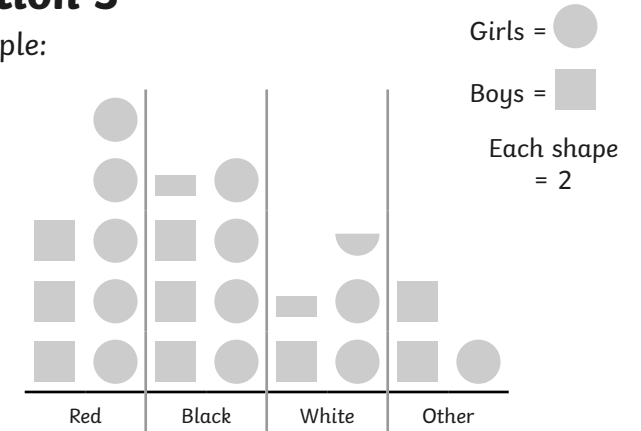
Put these numbers in order, smallest to largest:

201	312	223	103	112
103	112	201	223	312

smallest largest

Section 3

Example:



Section 4

Harry has a football match at 2.30pm. It will take 30 minutes to get there. It is now 2.15pm. Can he get to the match on time? Explain your answer.

No he will be 15 minutes late.

Section 6

I have £2.30.

A Fizzbomb costs 25p.

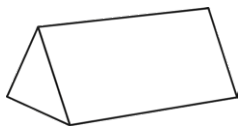
How many can I buy? Will I have any change?



9 with 5p change

Section 5

Draw a triangular prism. What 2D shape is at both of the ends?



triangle

Section 7

Fill in the missing numbers:

$$8 \div 4 = 18 - 16$$

$$5 \times 8 = 35 + 5$$

Section 8

Draw the reflection of the shape.

