




# Year 2 Maths Activity Mat 2 Answers

## Section 1

Use the correct sign  $<$  or  $>$  to make these true:

16	$<$	30
19	$>$	17

## Section 2

What are the missing numbers? 

12	11	10	9	8	7	6	5	4
----	----	----	---	---	---	---	---	---

## Section 3

A lorry has 10 wheels. How many wheels are there on 2 lorries?



20

## Section 4

Which number is the odd one out? How do you know?

20                      30                      15  
50                      40                      10



15 because the other numbers end with a 0.


## Section 6

Gill is going to see a film. It starts in half an hour. It is now 10 o'clock. What time will the film start?

10:30 or half past 10

## Section 5

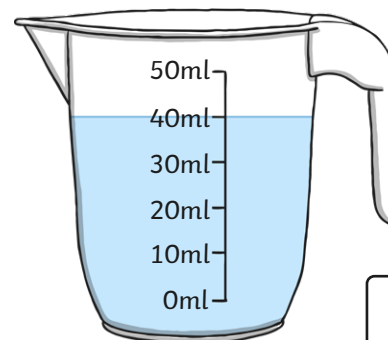
There are 4 cakes. Two of them are eaten. What fraction of cakes are left?



$\frac{1}{2}$

## Section 7

How much juice is in the jug?



40ml

## Section 8

Are these answers right? Can you correct any which are not correct?

$31 + 10 =$  ~~3~~ **41**

$17 - 4 =$  ~~1~~ **13**

$13 + 5 = 18$  ✓


# Year 2 Maths Activity Mat 2

## Section 1

Use the correct sign < or > to make these true:

26		44
71		17

## Section 2

What are the missing numbers? 

90		70	60			30	
----	--	----	----	--	--	----	--

## Section 3

A baker bakes 18 cakes. He sells half of them. How many are left?



## Section 4

Which number is the odd one out? Explain how you know.

13                      17                      11  
62                      91                      53



## Section 6

Hannah's train leaves at 11.30am. It is now 11.15am. How long does Hannah have to wait for the train to leave?

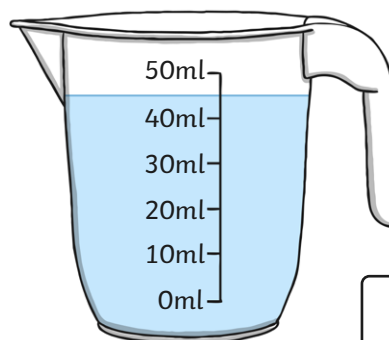
## Section 5

Kim eats one cake. What fraction of the amount has she eaten?



## Section 7

How much juice is in the jug?



## Section 8

Are these correct? Can you correct any which are not correct?

$$112 - 10 = 100$$

$$200 + 35 = 230$$

$$73 + 14 = 87$$


# Year 2 Maths Activity Mat 2 Answers

## Section 1

Use the correct sign < or > to make these true:

26	<	44
71	>	17

## Section 2

What are the missing numbers? 

90	<b>80</b>	70	60	<b>50</b>	<b>40</b>	30	20
----	-----------	----	----	-----------	-----------	----	----

## Section 3

A baker bakes 18 cakes. He sells half of them. How many are left?



9

## Section 4

Which number is the odd one out? Explain how you know.

13                      17                      11  
62                      91                      53

62 because it is even.




## Section 6

Hannah's train leaves at 11.30am. It is now 11.15am. How long does Hannah have to wait for the train to leave?

15 minutes

## Section 5

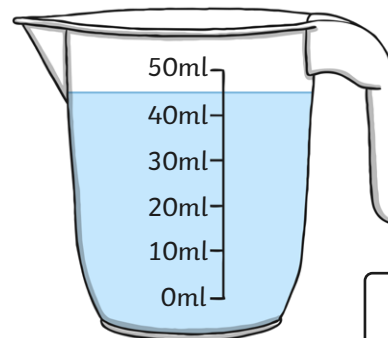
Kim eats one cake. What fraction of the amount has she eaten?



$\frac{1}{4}$

## Section 7

How much juice is in the jug?



45ml

## Section 8

Are these correct? Can you correct any which are not correct?

$112 - 10 =$  ~~10~~ **102**

$200 + 35 =$  ~~20~~ **235**

$73 + 14 = 87$  ✓

# Year 2 Maths Activity Mat 2

## Section 1

Use the correct sign  $<$  or  $>$  to make these true:

145		415
201		102

## Section 2

What are the missing numbers?



75		65	60			45	
----	--	----	----	--	--	----	--

## Section 3

Zoe puts her zoo animals in twos. She has 14 pairs. How many animals are there altogether?



## Section 4

Which number is the odd one out? Explain how you know.

107

204

113

91

115



## Section 6

Fran has 1 hour and 15 minutes until her dance exam. It is now 10am. What time will the exam start?

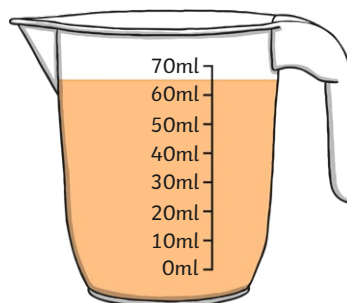
## Section 5

Mia eats one cake. Her sister eats one cake. What fraction of the cakes are left?



## Section 7

If a 40ml glass of a juice is poured out, how much will be left in the jug?



## Section 8

Billy has 112 football cards. He has given 22 of them away. He thinks he should have 95 left. Is he correct? Explain how you know.



.....

.....

