

Year 2 Maths Activity Mat 1

Section 1

Find the missing numbers:

$$15 + \square = 100$$

$$\square + 30 = 100$$


Section 4

Make 17p using the fewest number of coins.



Section 5

What time is the clock showing?



Section 7

Write down 2 facts about triangles.

.....

.....

.....

.....

Section 2

What's my number?

I have 2 digits.

My tens digit = $30 - 10$.

My ones digit is even,
and is two less than 6.

Section 6

Write these numbers in words:

13

.....

25


.....

11

.....

Section 8

There are 24 apples in a box. Half are sold. How many are left?



Section 3

I have 18 toy cars. I share them between my 2 friends. How many will they each have?



Year 2 Maths Activity Mat 1 Answers

Section 1

Find the missing numbers:

$$15 + \boxed{85} = 100$$

$$\boxed{70} + 30 = 100$$

Section 2

What's my number?

I have 2 digits.

My tens digit = $30 - 10$.

My ones digit is even, and is two less than 6.

24

Section 4


Make 17p using the fewest number of coins.



10p, 5p, 2p

Section 5

What time is the clock showing?



2 o'clock

Section 7


Write down 2 facts about triangles.

Accept any correct answers, e.g.

Triangles have 3 sides and 3 corners.

Section 8

There are 24 apples in a box. Half are sold. How many are left?



12

Section 6

Write these numbers in words:

13

thirteen

25

twenty-five

11

eleven

Section 3

I have 18 toy cars. I share them between my 2 friends. How many will they each have?



9

Year 2 Maths Activity Mat 1

Section 1

Find the missing numbers:

$$75 + \square = 100$$

$$\square + 33 = 100$$


Section 4

Make £3.15 using the fewest number of coins.



Section 5

What time is the clock showing?



Section 7

Write down 2 facts about rectangles.

.....

.....

.....

.....

Section 2

What's my number?

I have 2 digits.

I am even.

My tens digit is half of 40.

My ones number is even and between 7 and 9.

Section 6

Write these numbers as words:

441

.....

203

.....

117

.....

Section 8

I have 28 socks. How many pairs will I have?



Section 3

I have 62 football cards and I share them equally between my 2 friends. How many will they each have?



Year 2 Maths Activity Mat 1 Answers

Section 1

Find the missing numbers:

$$75 + \boxed{25} = 100$$

$$\boxed{67} + 33 = 100$$

Section 2

What's my number?

I have 2 digits.

I am even.

My tens digit is half of 40.

My ones number is even and between 7 and 9.

28

Section 4


Make £3.15 using the fewest number of coins.



£2, £1, 10p, 5p

Section 5

What time is the clock showing?



4:30 or half past 4

Section 6

Write these numbers as words:

441

four hundred and forty-one

203

two hundred and three

117

one hundred and seventeen

Section 7

Write down 2 facts about rectangles.

Accept any correct answers,

e.g. Rectangles have 4 sides,

their opposite sides are an equal

length, they have 4 corners.

Section 8

I have 28 socks. How many pairs will I have?



14

Section 3

I have 62 football cards and I share them equally between my 2 friends. How many will they each have?



31

Year 2 Maths Activity Mat 1

Section 1
Find the missing numbers:


$33 + 15 = 40 + \square$

$\square + 16 = 23 + 12$

Section 4
Make £4.63 using the fewest number of coins.



Section 5
What time is the clock showing?



Section 7
What do squares and rectangles have in common? Write two facts.

.....

.....

.....

.....

Section 2
What's my number?
I have 3 digits.
I am even.
My tens digit is half of 60.
My ones number is the same as 2×3 .
My hundreds number is double 400.

Section 6
Write these numbers in words:

211
.....


401
.....

Now write these words in numbers:

Nine hundred and four =

Two hundred and twenty-two =

Section 8
Egg boxes hold 6 eggs. I have 18 eggs. How many boxes will I need?



Section 3
I have 19 conkers. I share them between my 2 friends. How many will they each have? How many will be left over?

Year 2 Maths Activity Mat 1 Answers

Section 1

Find the missing numbers:

$$33 + 15 = 40 + \boxed{8}$$

$$\boxed{19} + 16 = 23 + 12$$

Section 2

What's my number?

I have 3 digits.

I am even.

My tens digit is half of 60.

My ones number is the same as 2×3 .

My hundreds number is double 400.

836

Section 4


Make £4.63 using the fewest number of coins.



**£2, £2, 50p, 10p,
2p, 1p**

Section 5

What time is the clock showing?



9:10 or ten past 9

Section 6

Write these numbers in words:

211

Two hundred and eleven

401

Four hundred and one

Now write these words in numbers:

Nine hundred and four = **904**

Two hundred and twenty-two = **222**

Section 7

What do squares and rectangles have in common? Write two facts.

Accept any correct answers, e.g.

They both have 4 sides, 4 corners,

their opposite sides are an equal

length.

Section 8

Egg boxes hold 6 eggs. I have 18 eggs. How many boxes will I need?



3