

Year 1 Maths Activity Mat

5

Section 1

Double these numbers:

3 →

2 →

5 →

Section 2

Ben has 10 marbles. He loses 3. How many are left?



Section 4


Share these apples equally into 2 groups.



How many are in each group?

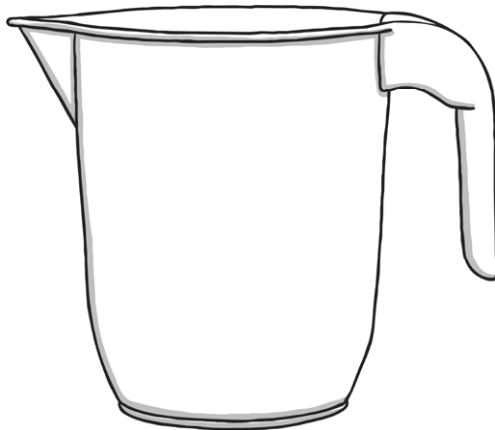
Section 6

Share the pencils into groups of 3.



Section 3

Colour in the juice to show the jug is half full.



Section 5

Write the answer to the sum on the calculator:



Section 7

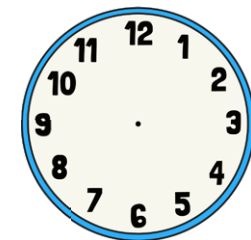

Next year, Tom will be 9 years old.



How old is he now?

Section 8

What time will it be in one hour?
Draw the hands on the clock.



Year 1 Maths Activity Mat: 5

Answers

Section 1

Double these numbers:

3 →

2 →

5 →


Section 2

Ben has 10 marbles. He loses 3. How many are left?



Section 4

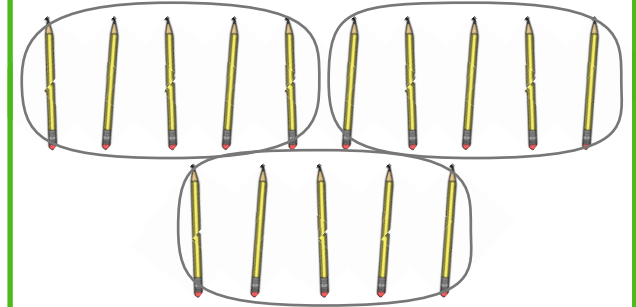
Share these apples equally into 2 groups.



How many are in each group?


Section 6

Share the pencils into groups of 3.



Section 3

Colour in the juice to show the jug is half full.



Section 5

Write the answer to the sum on the calculator:



Section 7



Next year, Tom will be 9 years old.



How old is he now?

Section 8

What time will it be in one hour?
Draw the hands on the clock.



Section 1

Double these numbers:

10 →

6 →

8 →

Section 2

Ben has 15 marbles. He loses 3. How many are left?



Section 4


Share these apples equally into 2 groups.



How many are in each group?


Section 6

Share the pencils into groups of 4. How many groups are there?



Section 3

Colour in the juice to show the jug is $\frac{3}{4}$ full.



Section 5

Write the answer to the sum on the calculator:



Section 7

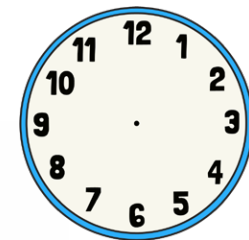

In 2 years' time, Tom will be 12 years old.



How old is he now?

Section 8

What time will it be in one hour?
Draw the hands on the clock.



Year 1 Maths Activity Mat: 5

Answers

Section 1

Double these numbers:

10 →

6 →

8 →

Section 2

Ben has 15 marbles. He loses 3. How many are left?



Section 4

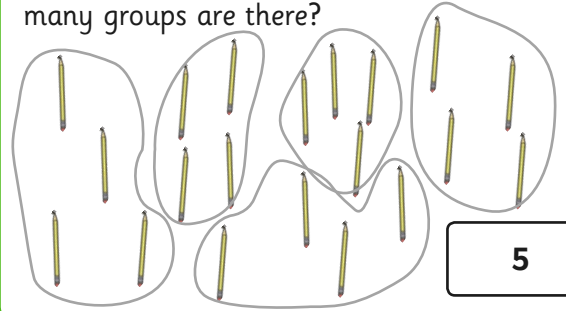
Share these apples equally into 2 groups.



How many are in each group?


Section 6

Share the pencils into groups of 4. How many groups are there?



Section 3

Colour in the juice to show the jug is $\frac{3}{4}$ full.



Section 5

Write the answer to the sum on the calculator:



Section 7



In 2 years' time, Tom will be 12 years old.



How old is he now?

Section 8

What time will it be in one hour?
Draw the hands on the clock.



Section 1

Double these numbers:

7 →

9 →

11 →

Section 2

Ben has 20 marbles. He loses 13. How many are left?



Section 4

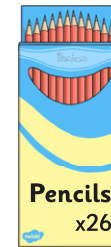
Share these bananas equally into 4 groups.



How many are in each group?

Section 6

If I share the pencils into groups of 2. How many groups will there be?




Section 3

A glass of juice is poured out.

$\frac{1}{4}$ of the juice in the jug has gone.

How much is left?



Section 5

Write the answer to the sum on the calculator:



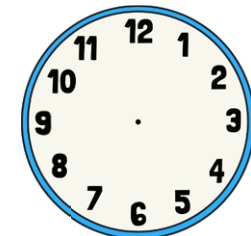

Section 7

Two years ago Tom was 11 years old. How old is he today?



Section 8

What time will it be in two hours? Draw the hands on the clock.



Year 1 Maths Activity Mat: 5

Answers

Section 1

Double these numbers:

7 →

9 →

11 →

Section 2

Ben has 20 marbles. He loses 13. How many are left?



Section 4

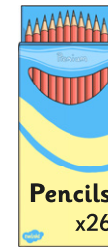
Share these bananas equally into 4 groups.



How many are in each group?

Section 6

If I share the pencils into groups of 2. How many groups will there be?




Section 3

A glass of juice is poured out.

$\frac{1}{4}$ of the juice in the jug has gone.

How much is left?



Section 5

Write the answer to the sum on the calculator:



Section 7

Two years ago Tom was 11 years old. How old is he today?



Section 8

What time will it be in two hours?
Draw the hands on the clock.

