

# Year 1 Maths Activity Mat

2

## Section 1

Fill in the boxes to show how many flowers there are altogether.



$$\square + \square = \square$$

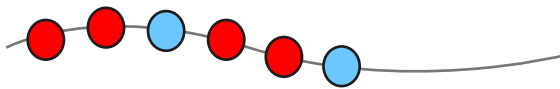
## Section 4

How many legs do you see?



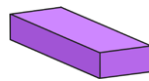
## Section 2

Draw and colour the next 3 beads in the pattern.



## Section 5

How many of each shape are there?




sphere =

cuboid =

## Section 7

Draw the hands on the clock to show 7 o'clock.



## Section 3

What day will it be tomorrow? Circle the correct day.



Saturday

Sunday


Monday

## Section 6

Match up the words which describe the jugs.




full



half full

## Section 8

Draw the coins that I need to buy the toy.



# Year 1 Maths Activity Mat: 2

Answers

## Section 1

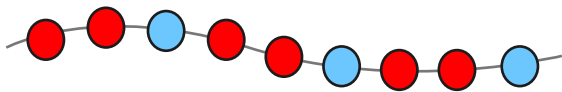
Fill in the boxes to show how many flowers there are altogether.



$$\boxed{5} + \boxed{3} = \boxed{8}$$

## Section 2

Draw and colour the next 3 beads in the pattern.



## Section 3

What day will it be tomorrow? Circle the correct day.



Saturday

Sunday

Monday

## Section 4

How many legs do you see?



## Section 5

How many of each shape are there?

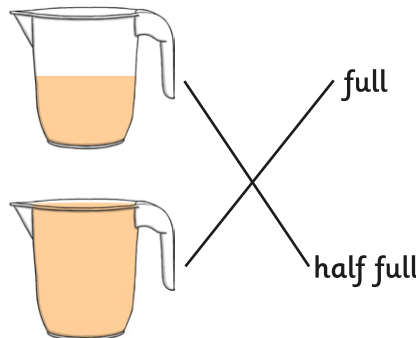


sphere =

cuboid =


## Section 6

Match up the words which describe the jugs.




## Section 7

Draw the hands on the clock to show 7 o'clock.



## Section 8

Draw the coins that I need to buy the toy.



example:



# Year 1 Maths Activity Mat

2

## Section 1

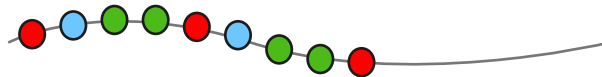
Draw 4 more flowers. Fill in the boxes to show how many flowers there are altogether.



$$\square + \square = \square$$

## Section 2

Draw and colour the next 3 beads in the pattern.



## Section 3


What day was it **yesterday**? Circle the correct day.



Thursday    Friday    Saturday    Sunday

## Section 4

How many feet are there on 3 penguins?



## Section 5

How many of each shape are there?



triangular prism =     cube =

## Section 6

Match up the words which describe the jugs.



full




empty



half full


## Section 7

Draw the hands on the clock to show half past 2.



## Section 8

Draw the coins that I need to buy the toy.



# Year 1 Maths Activity Mat: 2

## Answers

### Section 1

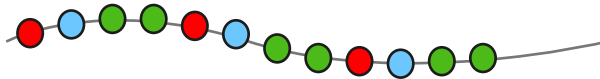
Draw 4 more flowers. Fill in the boxes to show how many flowers there are altogether.



$$\boxed{6} + \boxed{4} = \boxed{10}$$

### Section 2

Draw and colour the next 3 beads in the pattern.



### Section 3


What day was it yesterday? Circle the correct day.



Thursday Friday Saturday Sunday

### Section 4

How many feet are there on 3 penguins?



6

### Section 5

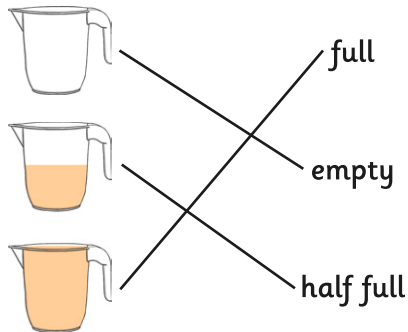
How many of each shape are there?



triangular prism =  cube =


### Section 6

Match up the words which describe the jugs.




### Section 7

Draw the hands on the clock to show half past 2.




### Section 8

Draw the coins that I need to buy the toy.



example:



# Year 1 Maths Activity Mat

2

## Section 1

Draw 4 more flowers. Fill in the boxes to show how many flowers there are altogether.



$$\square + \square = \square$$

## Section 2

Draw and colour the next 5 beads in the pattern.



## Section 3

What will it show in 2 days' time? Circle the correct date.



Sunday  
June 11<sup>th</sup>

Monday  
June 12<sup>th</sup>

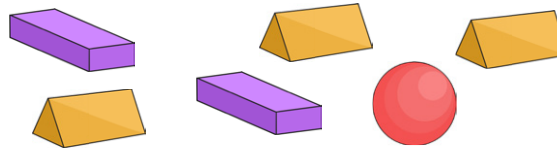
Tuesday  
June 13<sup>th</sup>

## Section 4

You are at the zoo. You look into the giraffe area. You see 12 legs. How many giraffes are in there?

## Section 5

How many of each shape are there?



triangular prism =  sphere =

cuboid =

## Section 6

Colour the jugs to make their labels correct.



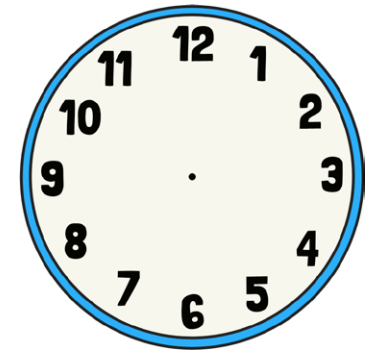
full



half full


## Section 7

Draw the hands on the clock to show quarter past 11.



## Section 8

Draw the coins that I need to buy the toy.



# Year 1 Maths Activity Mat: 2

## Answers

### Section 1

Draw 4 more flowers. Fill in the boxes to show how many flowers there are altogether.



$$\boxed{8} + \boxed{4} = \boxed{12}$$

### Section 2

Draw and colour the next 5 beads in the pattern.



### Section 3

What will it show in 2 days' time? Circle the correct date.



Sunday  
June 11<sup>th</sup>

Monday  
June 12<sup>th</sup>

Tuesday  
June 13<sup>th</sup>

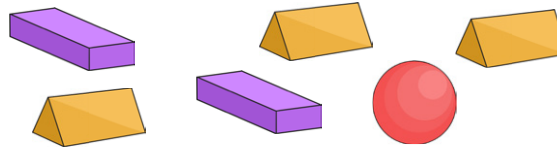
### Section 4

You are at the zoo. You look into the giraffe area. You see 12 legs. How many giraffes are in there?

3

### Section 5

How many of each shape are there?

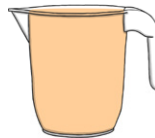


triangular prism =  sphere =

cuboid =

### Section 6

Colour the jugs to make their labels correct.




full



half full


### Section 7

Draw the hands on the clock to show quarter past 11.



### Section 8

Draw the coins that I need to buy the toy.



example:

