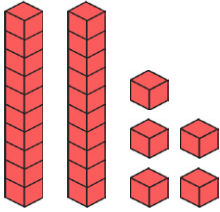


Year 1 Maths Activity Mat

6

Section 1

Write the number in the box.



Section 2

Can I buy the sunglasses?



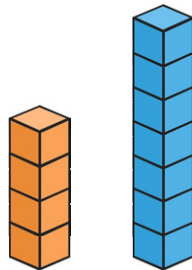
Section 3

What numbers come next?

10	9	8			
----	---	---	--	--	--

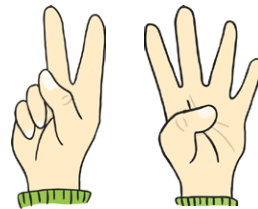
Section 4

How many cubes taller is the blue tower than the orange tower?



Section 5

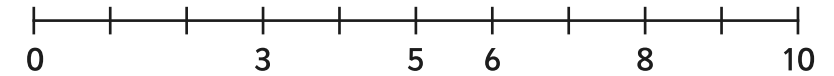
How many fingers are there?



Section 6

Put these numbers on the number line.

9 4 2 1 7



Section 7

9 is 1 more than

6 is 1 more than


Section 8

Archie has 3 sausages on his plate.

He eats one.

How many are left?

Write a number sentence so show this.

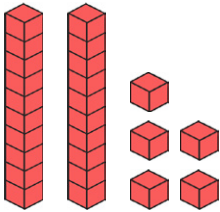


Year 1 Maths Activity Mat: 6

Answers

Section 1

Write the number in the box.



25

Section 3

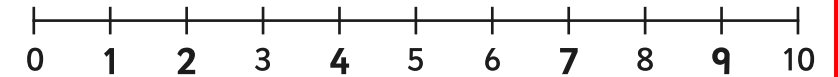
What numbers come next?

10	9	8	7	6	5
----	---	---	---	---	---

Section 6

Put these numbers on the number line.

9 4 2 1 7



Section 2

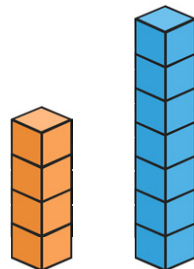
Can I buy the sunglasses?



yes

Section 4

How many cubes taller is the blue tower than the orange tower?



3

Section 7

9 is 1 more than

8

6 is 1 more than

5


Section 8

Archie has 3 sausages on his plate.

He eats one.

How many are left?


Write a number sentence so show this.



$3 - 1 = 2$

Section 5

How many fingers are there?



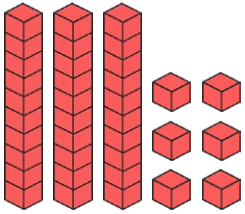
6

Year 1 Maths Activity Mat

6

Section 1

Write the number in the box.



Section 2

Can I buy the sunglasses?



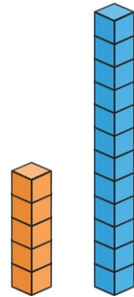
Section 3

What numbers come next?

22	20	18			
----	----	----	--	--	--

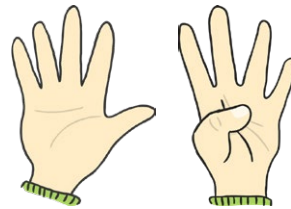
Section 4

How many cubes taller is the blue tower than the orange tower?



Section 5

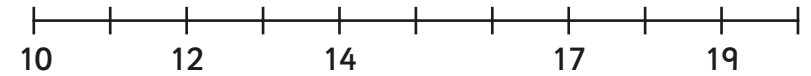
How many fingers are there?



Section 6

Put these numbers on the number line.

11 18 13 16 15 20



Section 7

12 is 1 more than

15 is 1 more than


Section 8

Archie has 5 sausages on his plate.

He eats one.

How many are left?

Write a number sentence so show this.

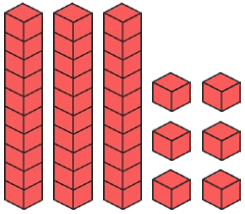


Year 1 Maths Activity Mat: 6

Answers

Section 1

Write the number in the box.



36

Section 2

Can I buy the sunglasses?



no

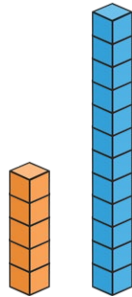
Section 3

What numbers come next?

22	20	18	16	14	12
----	----	----	----	----	----

Section 4

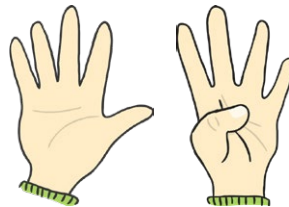
How many cubes taller is the blue tower than the orange tower?



7

Section 5

How many fingers are there?

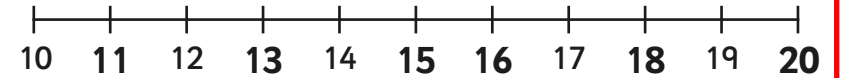


9

Section 6

Put these numbers on the number line.

11 18 13 16 15 20



Section 7

12 is 1 more than

11

15 is 1 more than

14


Section 8

Archie has 5 sausages on his plate.

He eats one.

How many are left?

Write a number sentence so show this.



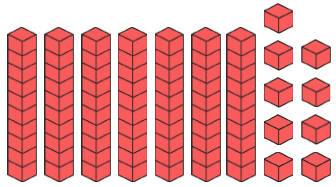
$$5 - 1 = 4$$

Year 1 Maths Activity Mat

6

Section 1

Write the number in the box.



Section 2

Can I buy the sunglasses?



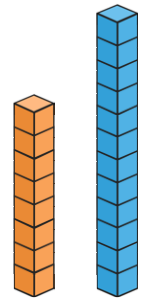
Section 3

What numbers come next?

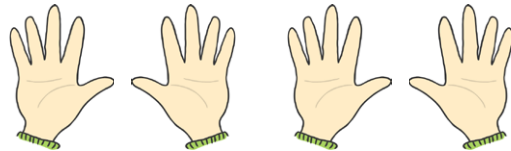
84	82	80			
----	----	----	--	--	--

Section 4

How many cubes taller is the blue tower than the orange tower?



Section 5

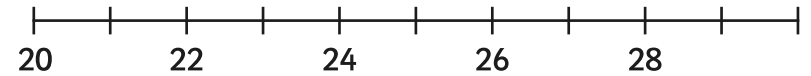


4 lots of 5 fingers =

Section 6

Put these numbers on the number line.

23 30 25 21 27 29



Section 7

20 is 1 more than

17 is 1 more than


Section 8

Archie has eaten 2 sausages.

He has 3 left.

How many sausages did he have to start with?

Write a number sentence to show this.

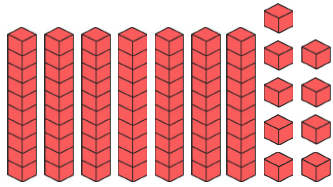


Year 1 Maths Activity Mat: 6

Answers

Section 1

Write the number in the box.



79

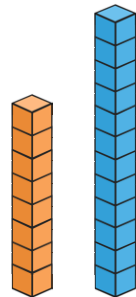
Section 3

What numbers come next?

84 82 80 **78** **76** **74**

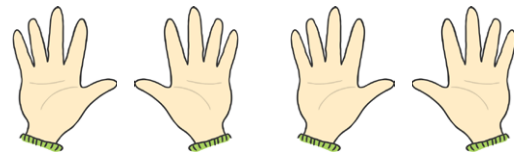
Section 4

How many cubes taller is the blue tower than the orange tower?



4

Section 5

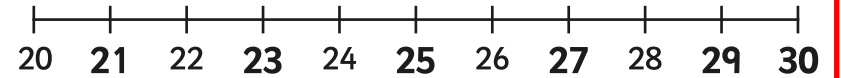


4 lots of 5 fingers = **20 fingers**

Section 6

Put these numbers on the number line.

23 30 25 21 27 29



Section 2

Can I buy the sunglasses?



no

Section 7

20 is 1 more than

19

17 is 1 more than

16


Section 8

Archie has eaten 2 sausages.

He has 3 left.

How many sausages did he have to start with?

Write a number sentence to show this.



5 - 2 = 3